

MILESTONE ACADEMY
2023 - 2024
VACATION HOME WORK
CLASS – 5

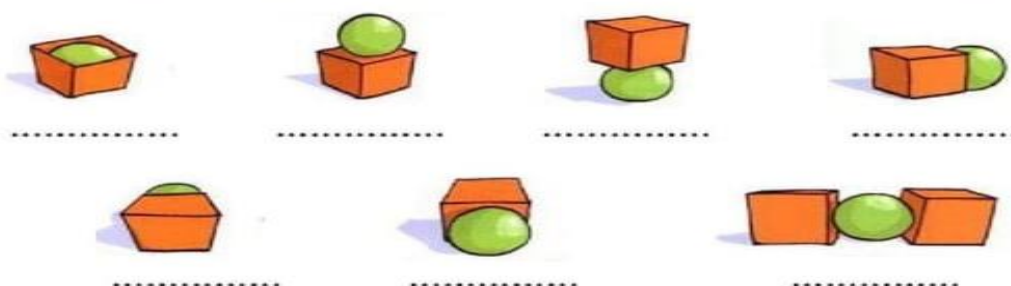
DATE OF SUBMISSION- 16.06.23

NOTE:-

1. The Vacation Home Work is to help your child to be busy . The Work will be assessed after submission.
2. All the work of every subject has to be done in a Single Note Book . Drawings of every subject & Craft Work to be done in the chart papers & stapled together.

ENGLISH

1. Choose the correct preposition of place



2. Look the picture and read the sentences



- | | | |
|--|------|-------|
| 1. The family photo is on the wall. | TRUE | FALSE |
| 2. The T.V is behind the table. | TRUE | FALSE |
| 3. The fireplace is under to the sofa. | TRUE | FALSE |
| 4. The cushion is on the sofa. | TRUE | FALSE |
| 5. The coffee table is in front of the armchair. | TRUE | FALSE |
| 6. The chair is near the cupboard. | TRUE | FALSE |

3. Complete with the correct part of the house

1. I do my homework in the _____
2. I wash my hands and clean my teeth in the _____
3. We wash and iron our clothes in the _____
4. My parents cook the meals in the _____
5. My parents keep the car in the _____
6. This room is under the roof of my house _____

4. Our school is our second home we must keep our school clean. So write and draw any 10 rules that you follow to keep your school clean and hygienic on an A3 size green and red color sheet.
5. Read the newspaper regularly during holidays you may utilize your noon time for this activity when you are at home. Cut five pictures per week from old newspapers paste them in scrap file and give a catchy caption to each picture.
6. Write 10 lines about your family members, their hobbies and also paste their pictures.
7. **Directions: Read each sentence below. Fill-in the blank with a vocabulary word from the word box.**

asleep	afternoon	scare	telephone	instrument	ability	audience
band	exciting	marry	practice	opportunity	support	available
influence						

1. In the _____ we will go home from school
2. I fell _____ at night
3. The _____ played a lot of good songs
4. The game was very _____ at the end
5. I used my _____ to call my parents
6. My older brother wanted to _____ me
7. I watched my older sister _____ her life-long sweetheart
8. We had basketball _____ after school
9. What _____ do you play?
10. She had to _____ her mom to let her go
11. That boy has a great _____ to learn
12. Do you think i have the _____ to succeed?
13. I hope that all your teachers _____ you
14. Do you know when the movie will be _____?
15. The play was performed in front of the _____?

HINDI

प्रश्न 1. चित्रों के नाम चुनकर लिखिए -

1.



Illustration of a yellow envelope with a red border and a small red flag on top.

2.



Illustration of a human ear.

3.



Illustration of a yellow castle with red roofs and flags.

4.



5.



Illustration of a smiling red tomato.

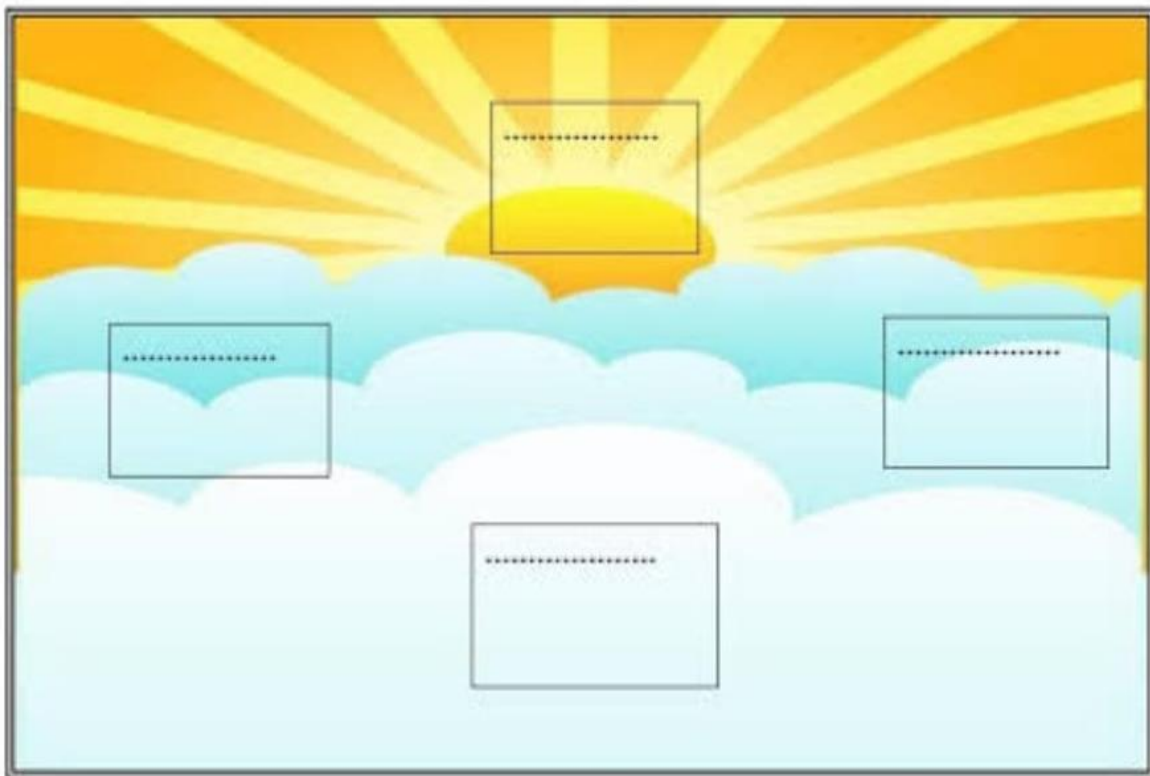
6.



-

टमाटर , किला , माचिस , खत , जहाज़ , कान

प्रश्न 2— दिशाओं के नाम लिखो —



(क) सूर्य से निकलता है और
में डूबता है।

(ख) हिमालय भारत के में है।

(ग) कन्याकुमारी भारत के में है।

प्रश्न 3— हिन्दी के समाचार-पत्र और पत्रिकाएँ पढ़ो। किन्हीं दो के नाम लिखो।

समाचार-पत्र

पत्रिकाएँ

4.

शब्द के आखिरी अक्षर से नया शब्द बनाइए और आगे बढ़ते जाइए।



5.

चित्र देखो और लिंग बताओ-



पुल्लिंग



6.

स्त्रीलिंग रूप लिखो-

1. तोता

2. मामा

3. मोर

4. मुरगा

5. ऊँट

6. राजा

7.

निम्नलिखित स्त्रीलिंग शब्दों को पुल्लिंग में बदलो-

1. अध्यापिका

2. लेखिका

3. लड़की

4. पुत्री

5. धोबिन

6. चुहिया

संज्ञा

8.



वर्ग के अनुसार चित्रों में रंग भरो -



व्यक्ति - ● जानवर - ● स्थान - ● वस्तु - ●







MATHS

Q.1) Find and colour the equivalent fractions

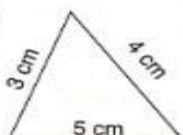
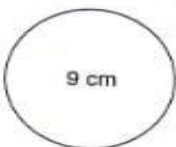
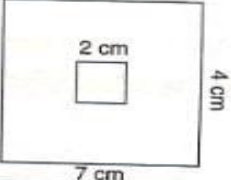
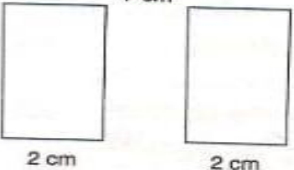
(a)  $\frac{2}{5} = \frac{\square}{10}$ 

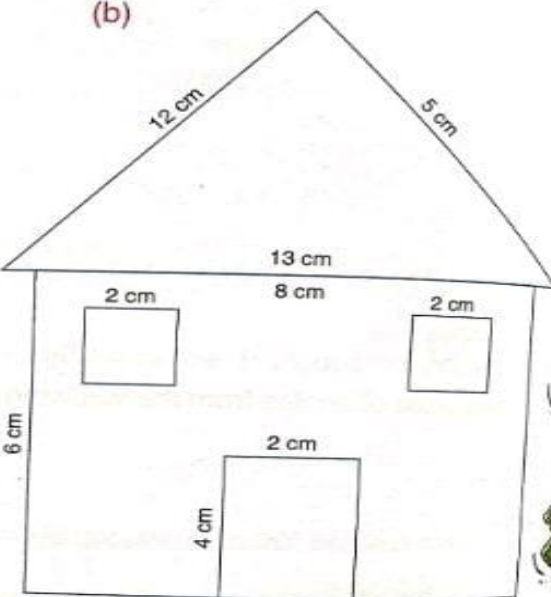
(b)  $\frac{1}{2} = \frac{3}{\square}$ 

(c)  $\frac{1}{4} = \frac{3}{\square}$ 

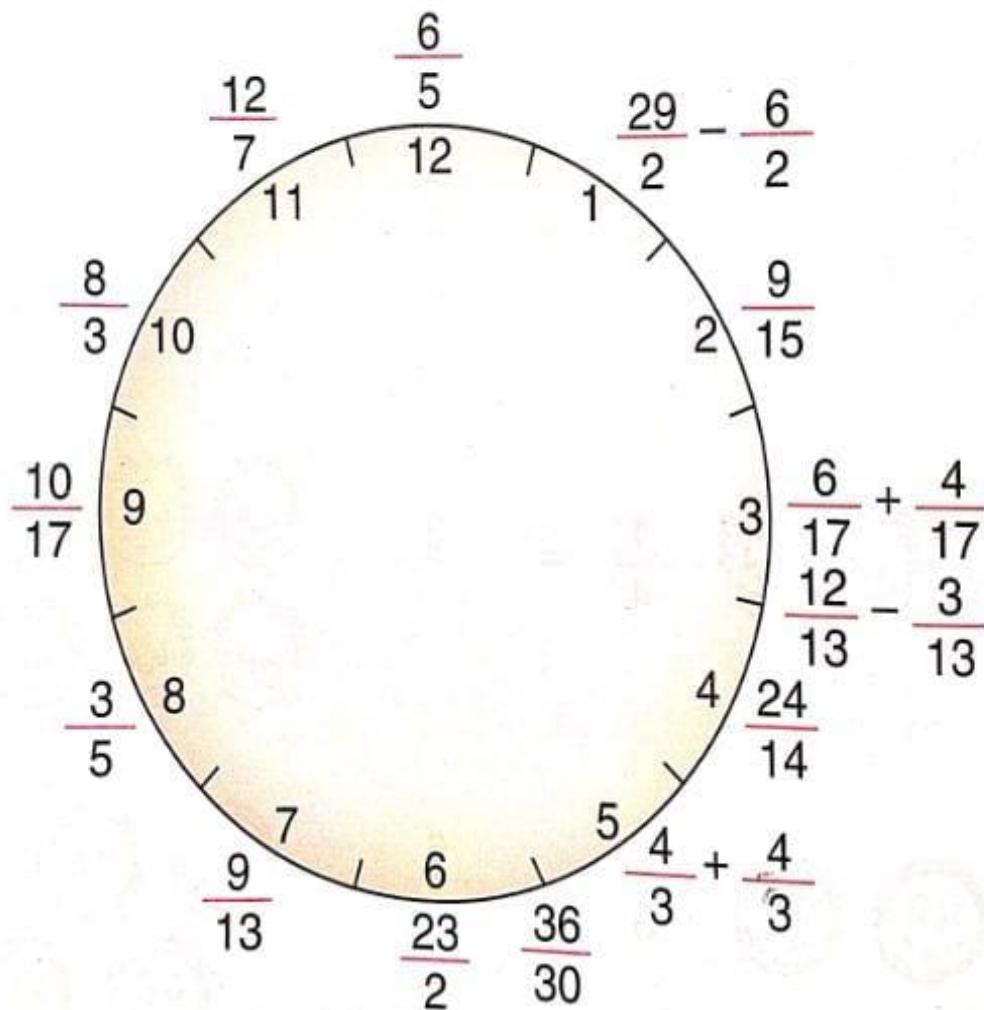
(d)  $\frac{2}{3} = \frac{6}{\square}$ 

Q.2) Find the perimeter of the following figures:-

(a) 




(b) 

Q.3) Reduce the fraction to the lowest term and then match the equivalent fractions using the hour hand and the minute hand of the clock and note the time.



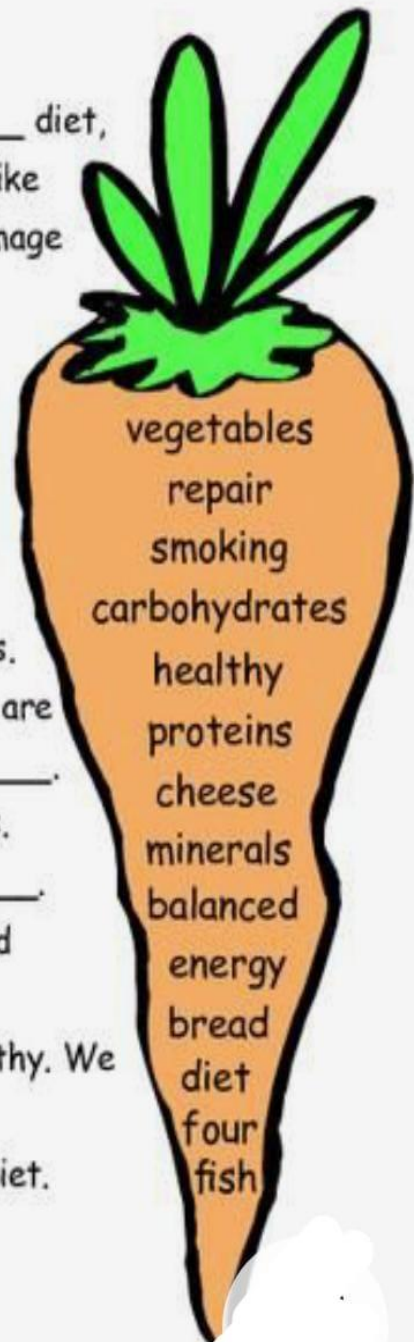
1. Fill in the missing spaces with the words from the carrot below:

Health

To stay _____ we need a _____ diet,
exercise and rest. We need to avoid things like
_____, alcohol and drugs, as they damage
our bodies in different ways.

A healthy _____ is essential for
a healthy body.

Food is what gives us _____ to
live our lives. Foods are split into
_____ main groups, carbohydrates,
_____, fats and vitamins and minerals.
_____ give our bodies energy. They are
foods such as pasta, potatoes and _____.
Proteins help us grow and _____ cells.
They are foods such as meat and _____.
Fats also give us energy. Food like butter and
_____ are fats.
Vitamins and _____ help us stay healthy. We
find these in fruit and _____.
Water is also very important for a healthy diet.



2.

WORKSHEET-2

1. Which kind of garbage can be disposed off in the following containers-


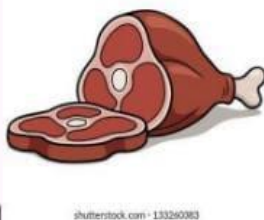
a. Biodegradable waste (Green) _____

b. Non-biodegradable waste (blue) _____

c. Hazardous waste (Red) _____

2. Make a list of healthy five items that you consume without any skip.

3. Classify among the pictures-Energy giving food, Body-building food, Protective food items-





3. Tick the boxes below using the information on the stone tablets:

	Slate	Sandstone	Marble	Granite
soft				
hard				
permeable				
non permeable				
can be shiny				
dull				

4. Hello! My name is Tim and I like clothes.

At the moment I am wearing my favourite clothes



_____, a blue



_____, _____ and a pair of



_____. And a



_____, of course! I also like wearing



_____.

I have got a sister. Her name is Alice and she also likes fashionable clothes. Today she is



wearing an orange

_____ and a



_____.

In summer she likes wearing



_____ and in winter she loves wearing



_____ and a



_____.

My parents are very formal. My father usually wears



_____, a white



_____, a



_____ and a



_____. He never

forgets his



_____.

My mother prefers wearing a

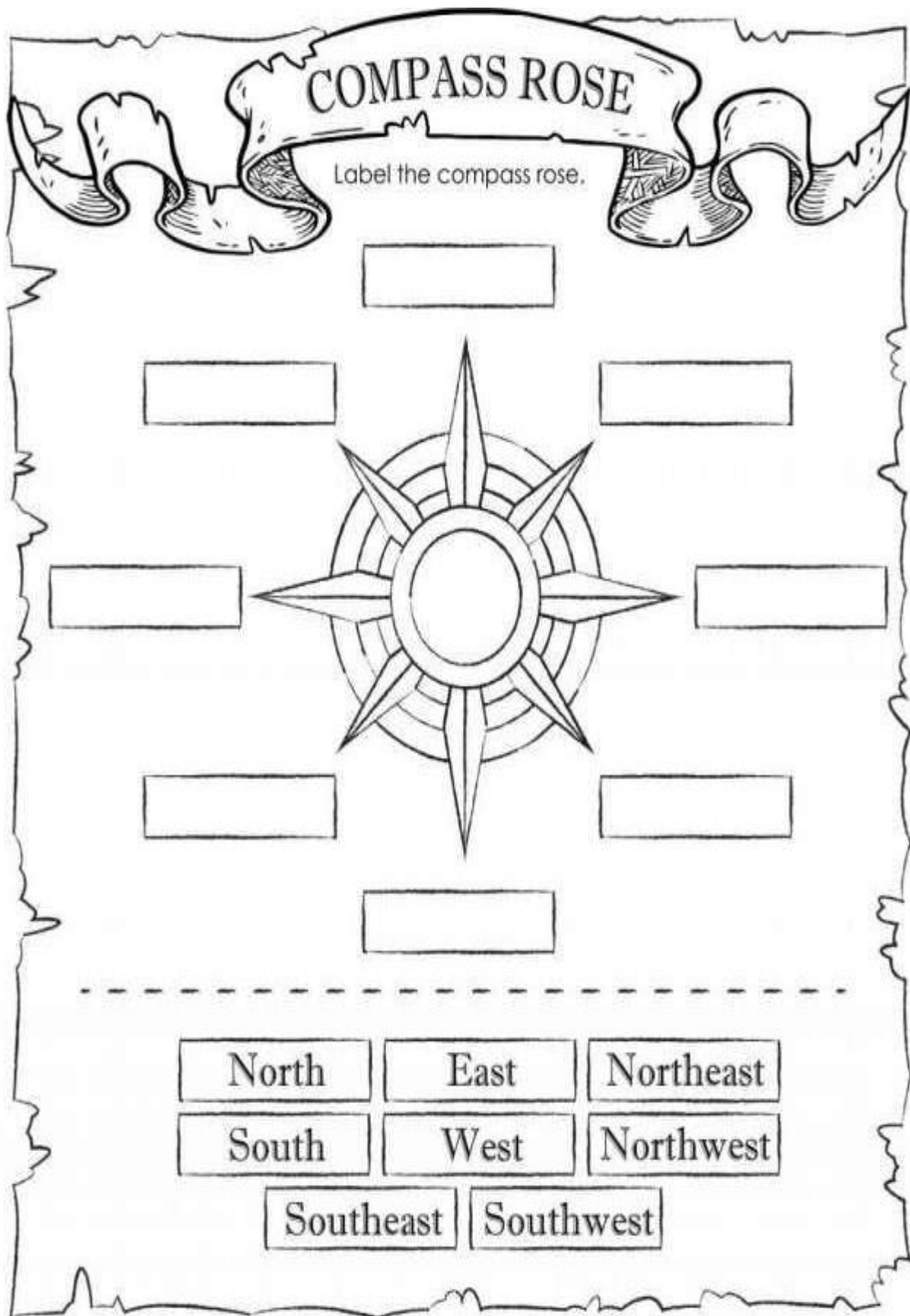


_____ and high heel




S.Sc

1. Write down the following details of your own.



2.

Treasure Map



1. The map shows a waterfall in the northwest corner.

Color the waterfall symbol **light blue**.

2. Landlubber Lake is in the center of the map. Color it **dark blue**.

3. Pirates' Cove is in the northeast corner of the map. Color the hills **gray**.

4. Buried treasure can be found in the southwest corner. Color the treasure chest and the sand around it **yellow**.

5. Red Rocks Hideout is located just north of the treasure. Color the rocks **red**.

6. The Pyramid Mountains are located in the _____ corner.
Color them **purple**.



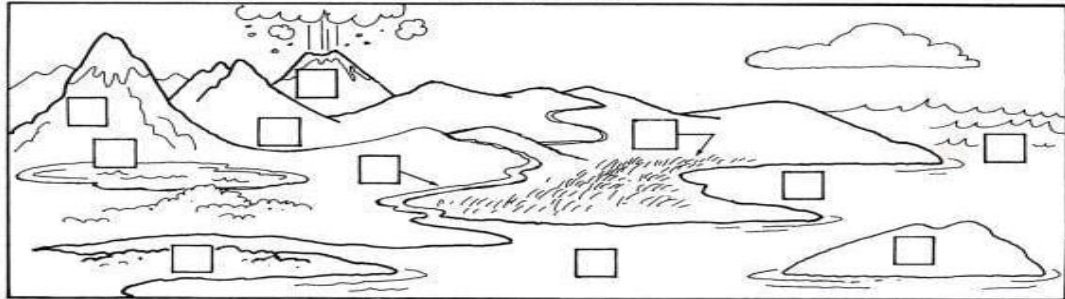
3.

Earth's physical features are its natural formations. Match each formation with its definition by writing a number in each blank.

- | | |
|-----------------|--|
| _____ river | 1. land rising high above the land around it |
| _____ bay | 2. land surrounded completely by water |
| _____ island | 3. piece of land surrounded by water on all but one side |
| _____ gulf | 4. inlet of a large water body that extends into the land; smaller than a gulf |
| _____ mountain | 5. Earth opening that spills lava, rock, and gases |
| _____ plain | 6. large inland body of water |
| _____ lake | 7. lowland between hills or mountains |
| _____ peninsula | 8. long, narrow body of water |
| _____ valley | 9. large area of flat grasslands |
| _____ volcano | 10. vast body of salt water |
| _____ ocean | 11. large area of a sea or ocean partially enclosed by land |

Now write each feature's number on the map.



Features Map



LATITUDE OR LONGITUDE?

4.

Draw the boxes into the correct columns

	
LATITUDE	LONGITUDE

Lines that run north and south.

These lines are called parallels.

Lines extending around the Earth horizontally.

Measure distance east or west.

The Equator is at 0° degrees

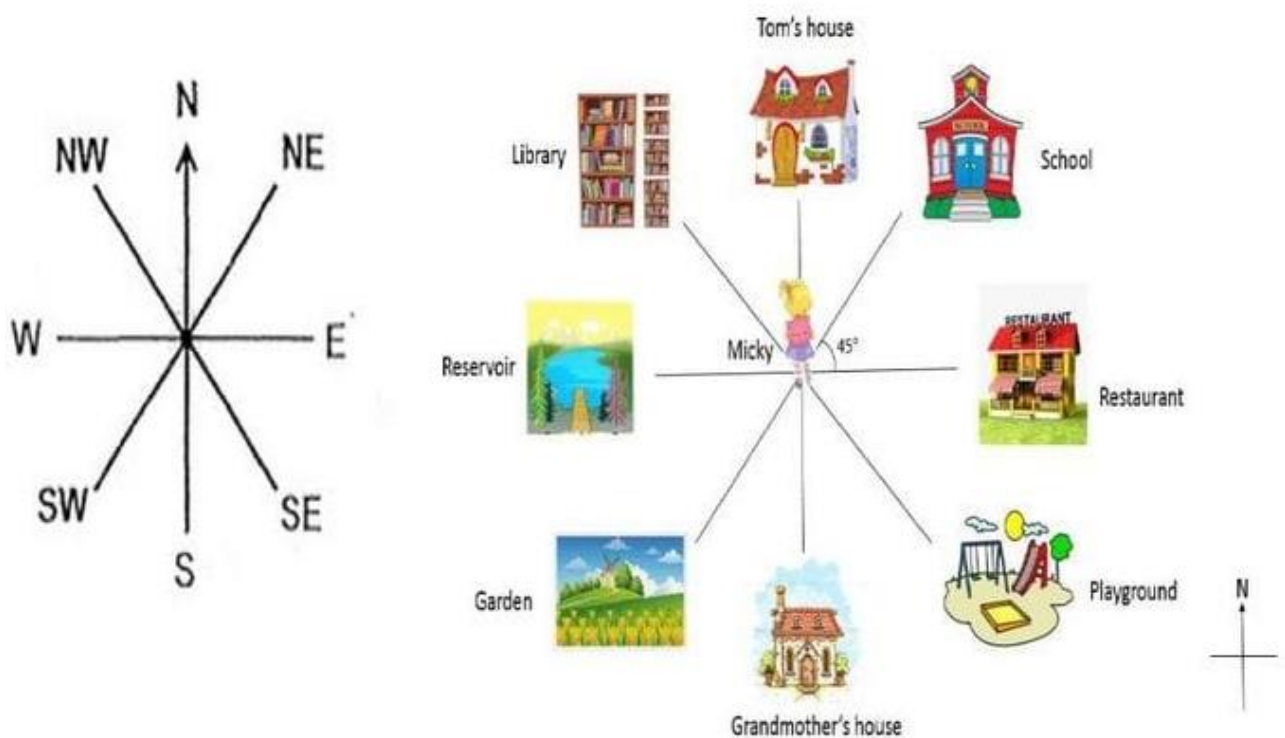
The Prime Meridian, in Greenwich, is at 0°
Lines run east or west.

These lines are called meridians.

The lines running vertically around the Earth.

Measure distance north or south.

5. Topic: The Eight Point Compass



Use the Eight Point compass to tell Micky's location. Then write your answer in the direction box. (**TYPE ANSWERS USING CAPS LOCK**)

Micky's location	Direction
1. Micky goes to school.	
2. She goes to the restaurant.	
3. Micky goes to her grandmother's house.	
4. Her friend Tom wants her to come over to his house.	
5. Micky's family goes to the reservoir.	
6. She wants to play at the playground.	
7. On Sunday, Micky's family goes to visit the garden.	
8. Micky is going the library to borrow some books.	